

## Round 1: Indigenous Peoples

Total: (  /10)

### Questions

### Answers


1. The Iroquois cultivated the "Three Sisters." Which of the following crops was not part of the group?

- A) Squash
- B) Beans
- C) Corn
- D) Tobacco

2. What is the name of the traditional food made from bison meat, fat and berries?

- A) Sausage
- B) Bannock
- C) Pemmican
- D) Bison jerky

3. Which Indigenous group most likely lived in structures similar to the one in the image provided?



- A) Inuit
- B) Mi'kmaq
- C) Iroquois
- D) Dene

4. What type of tree was used to carve these totem poles?



- A) Oak
- B) Blue spruce
- C) Western red cedar
- D) Douglas fir

5. The Salish Sea is located in which province or territory?

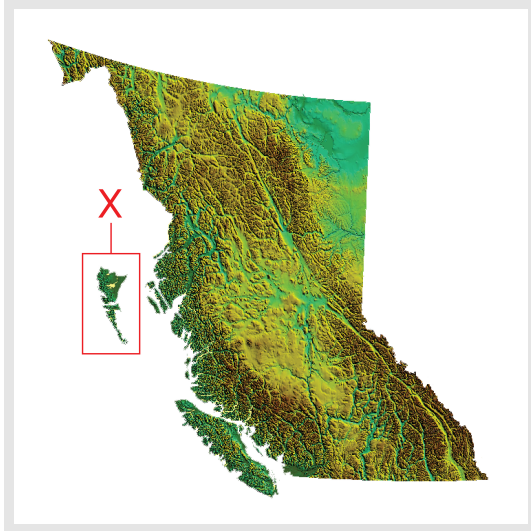
- A) British Columbia
- B) Yukon
- C) Nova Scotia
- D) Newfoundland and Labrador

6. Which of the following Indigenous group inhabited the area marked with an "X"?



- A) Beothuk
- B) Iroquois
- C) Blackfoot
- D) Mi'kmaq

7. Which of the following Indigenous group inhabited the area marked with an "X"?




- A) Okanagan
- B) Haida
- C) Dene
- D) Nisga'a

8. Which Indigenous group is most likely responsible for building these features?



- A) Métis
- B) Inuit
- C) Beothuk
- D) Coast Salish

9. Which of the following is not a purpose of these features?



- A) Hunting aid
- B) Land claim marker
- C) Navigational helper
- D) Message centre

10. Which Indigenous group most likely lived in structures similar to the ones shown?



- A) Haida
- B) Blackfoot
- C) Beothuk
- D) Coast Salish

## Round 2: Biomes

Total: (  /10)

## Questions

## Answers

1. Which of the following is NOT a major biome in Canada?

- A) Tundra
- B) Grassland
- C) Boreal Forest
- D) Desert

2. Which biome is dominated by pine and spruce trees?

- A) Savanna
- B) Boreal Forest
- C) Deciduous Forest
- D) Tropical Rainforest

3. Which two biomes are most similar regarding rainfall?

- A) Rainforest and Savanna
- B) Tundra and Taiga
- C) Temperate Deciduous forest and Grassland
- D) Desert and Tundra

4. In which biome are xerophyte plants most likely to occur?

- A) Tundra
- B) Boreal Forest
- C) Temperate Deciduous forest
- D) Grassland

5. In which biome is agriculture a dominant human activity?

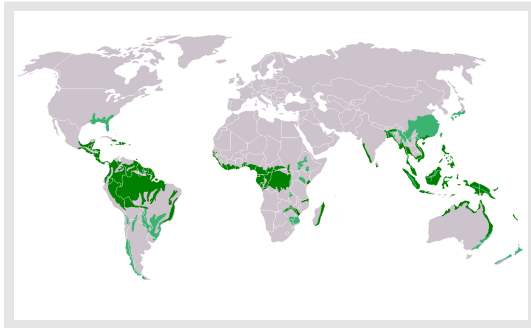
- A) Boreal Forest
- B) Desert
- C) Temperate Rainforest
- D) Grassland

6. Which African biome is most closely associated with the photograph?



- A) Desert
- B) Savanna
- C) Taiga
- D) Tropical Rainforest

7. Which biome is being shown on the map provided?



- A) Temperate Rainforest
- B) Tropical Rainforest
- C) Taiga
- D) Savanna

8. Which biome has the most biodiversity?

- A) Savanna
- B) Tropical Rainforest
- C) Boreal Forest
- D) Tundra

9. Which characteristic is associated with the tundra biome?
- A) Plants have deep roots
  - B) Trees drop their leaves
  - C) Large diversity of plants
  - D) Rapidly flowering plants
- 
10. Which characteristic is associated with the temperate grassland biome?
- A) More than 200cm of precipitation per year
  - B) Mild summers and cool winters
  - C) Rich and fertile soil
  - D) Acidic soil with few minerals

## Round 3: Europe Map

Total: (  /12)

### Questions

### Answers

1. Locate the country that is the headquarters of the European Union.



- A) 2
- B) 12
- C) 8
- D) 6

2. Locate the country that remained neutral during both World Wars.



- A) 10
- B) 8
- C) 1
- D) 2



3. Locate the country that was liberated by Canadians in the Second World War.



- A) 7
- B) 10
- C) 13
- D) 14

4. Locate the country that claims Greenland.



- A) 15
- B) 9
- C) 14
- D) 5

5. Locate the country that is bordered by a sea, a channel and a bay.



- A) 2
- B) 8
- C) 13
- D) 10

6. Locate the country that experiences sea-floor spreading.



- A) 16
- B) 4
- C) 5
- D) 18

7. Locate the country that was unified in 1990.



- A) 13
- B) 2
- C) 8
- D) 3

8. Locate the country that has the Black Sea on its northern border.



- A) 15
- B) 6
- C) 3
- D) 11

9. Locate the country where the Ural Mountains, which separate part of Europe and Asia, are located.



- A) 3
- B) 9
- C) 6
- D) 11

10. Locate the country that held a referendum in 2014 resulting in its remaining with the United Kingdom.



- A) 18
- B) 4
- C) 5
- D) 9

11. Locate the country that has the Pyrenees mountains on its eastern border?



- A) 13
- B) 15
- C) 2
- D) 8

12. Locate the country that is home to the Sistine Chapel and the Grand Canal.



- A) 2
- B) 1
- C) 10
- D) 16

## Round 4: Oceans

Total: (  /10)

### Questions

### Answers

- |  |  |
|--|--|
| <p>1. Which ocean is the world's smallest?</p> <ul style="list-style-type: none"><li>A) Atlantic</li><li>B) Pacific</li><li>C) Indian</li><li>D) Arctic</li></ul>                            |  |
| <p>2. What percentage of the Earth is covered by oceans?</p> <ul style="list-style-type: none"><li>A) 55%</li><li>B) 97%</li><li>C) 10%</li><li>D) 71%</li></ul>                             |  |
| <p>3. What is the largest animal in the oceans?</p> <ul style="list-style-type: none"><li>A) Giant squid</li><li>B) Nurse shark</li><li>C) Great white shark</li><li>D) Blue whale</li></ul> |  |
| <p>4. Which ocean is located between Australia and Africa?</p> <ul style="list-style-type: none"><li>A) Southern</li><li>B) Pacific</li><li>C) Atlantic</li><li>D) Indian</li></ul>          |  |

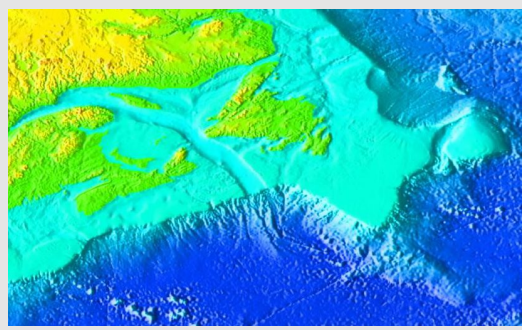
5. Which ocean has the most coral reefs?

- A) Pacific
- B) Arctic
- C) Indian
- D) Atlantic

6. Where is the deepest point in the world?

- A) Mariana Trench
- B) Peru-Chile Trench
- C) Aleutian Trench
- D) Java Trench

7. What is the term for the light blue area shown on the map?



- A) Ocean Trench
- B) Continental Shelf
- C) Sea Mount
- D) Ocean Ridge

8. Oceans produce more oxygen for the planet than tropical rainforests.

- A) FALSE
- B) TRUE

9. Which ocean holds almost 50% of Earth's total water surface?
- A) Pacific
  - B) Atlantic
  - C) Indian
  - D) Southern
- 
10. Which of the following devices is used for measuring the depths of water bodies?
- A) Altimeter
  - B) Anemometer
  - C) Barometer
  - D) Bathometer

## Round 5: Physical Geography

Total: (      /10)

Questions

Answers

1. What river feature is shown in the photograph?




- A) Oxbow
- B) Levee
- C) Meander
- D) Floodplain

2. What coastal feature is shown in the photograph?



- A) Stack
- B) Arch
- C) Cave
- D) Headland

3. Is the feature in question two, formed by erosion or deposition?



- A) Deposition
- B) Erosion

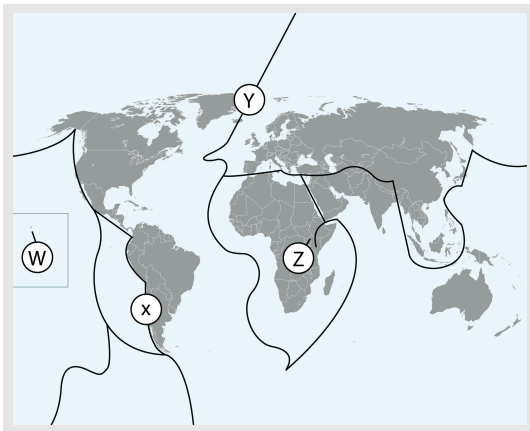


4. What type of volcano is shown in the photograph?



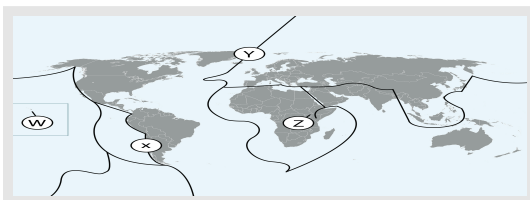
- A) Cinder cone
- B) Composite cone
- C) Caldera
- D) Strato

5. What type of plate boundary occurs at location "Z"?



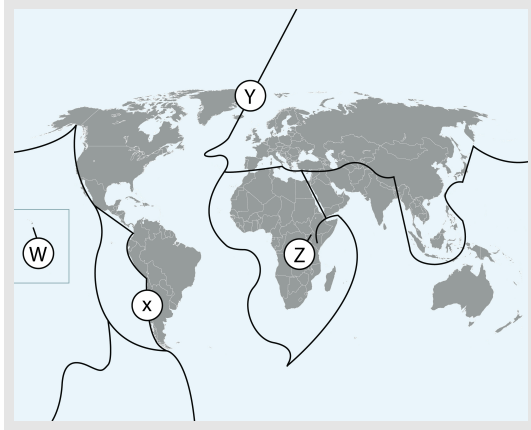
- A) Slip strike
- B) Convergent
- C) Subduction
- D) Rift

6. What type of volcano is most common at location "W"?



- A) Batholith
- B) Composite cone
- C) Shield
- D) Divergent

7. At which location is geothermal power a main source of energy?



- A) X
- B) Z
- C) Y
- D) W

8. What is the longest river in the world?

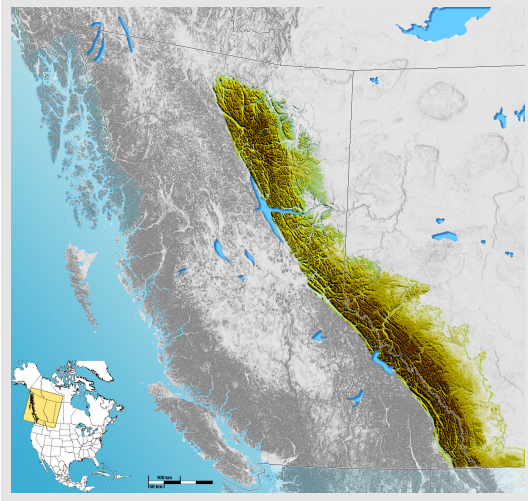
- A) Amazon River
- B) Congo River
- C) The Ganges
- D) The Nile

9. What glacial feature is being shown in the photograph?



- A) Moraine
- B) U-shaped valley
- C) Drumlin
- D) Pyramidal peak

10. Which mountain range is shown in the image?



- A) Rockies
- B) Appalachian
- C) Torngat
- D) Coast

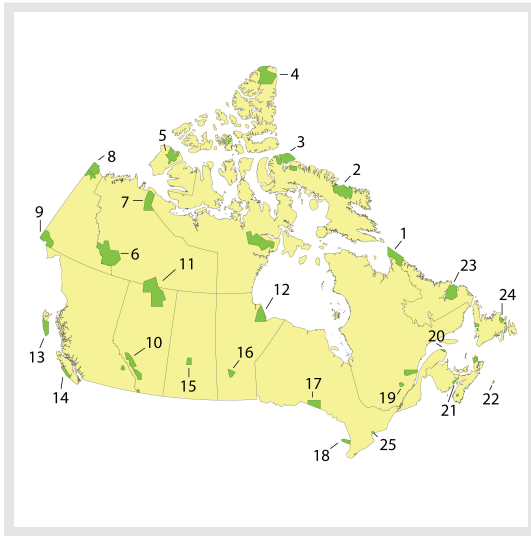
Round 6: National Parks

Total: (      /10)

Questions

Answers

1. Which national park would be most affected by a subduction zone earthquake?



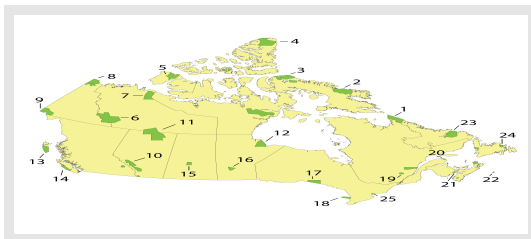
- A) 11
- B) 12
- C) 13
- D) 4

2. Which park is famous for the animals shown in the photograph?



- A) Torngat Mountains National Park
- B) Riding Mountain National Park
- C) Prince Albert National Park
- D) Sable Island National Park Reserve

3. What is unique about Rouge National Urban Park?
- A) It is Canada's first urban national park
  - B) It is a UNESCO World Heritage Site
  - C) It is home to endangered marine species
  - D) It is Canada's largest national park
- 
4. The use of drones is permitted by the general public in Canada's national parks.
- A) TRUE
  - B) FALSE
- 
5. How many of Canada's national parks were established prior to 1900?
- A) 5
  - B) 3
  - C) 4
  - D) 6
- 
6. In which national park will you observe a polar bear migration?
- A) Bruce Peninsula National Park
  - B) Wapusk National Park
  - C) Yoho National Park
  - D) Kootenay National Park
- 
7. Which national park has the world's highest tides?



- A) 21
- B) 19
- C) 2
- D) 22

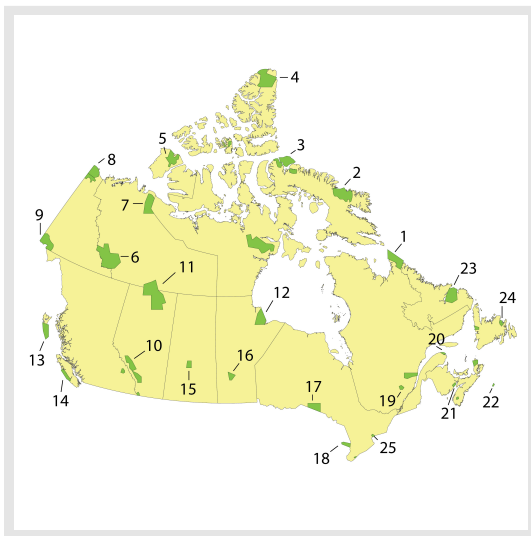
8. Bison were re-introduced to Grasslands National Park in 2005

- A) FALSE
- B) TRUE

9. Which park is Canada's smallest in area?

- A) Gulf Islands National Park Reserve
- B) Prince Edward Island National Park
- C) Georgian Bay Islands National Park
- D) Thousand Islands National Park

10. Which national park is home to Canada's highest mountain peak?



- A) 6
- B) 9
- C) 14
- D) 8

## Round 7: Olympics

Total: (  /10)

Questions

Answers

1. Which country hosted the original Olympic Games?

- A) Russia
- B) Greece
- C) France
- D) United States

2. Using the map provided, which country hosted the 2016 Olympic Summer Games?



- A) B
- B) D
- C) C
- D) A

3. Which Canadian cities have hosted the Olympic Games?
- A) Toronto, Vancouver, Edmonton
  - B) Quebec City, Victoria, Regina
  - C) Vancouver, Calgary, Montreal
  - D) Ottawa, Winnipeg, Halifax
- 
4. Which city is the most southerly location to have hosted the summer Olympic Games?
- A) Nagano
  - B) Rio de Janeiro
  - C) Melbourne
  - D) Sydney
- 
5. Traditionally, which country's athletes are the first to enter the opening ceremonies?
- A) Greece
  - B) Russia
  - C) United States
  - D) Canada
- 
6. Which of the following Olympic host cities is at the highest elevation?
- A) Lillehammer, Norway
  - B) Sochi, Russia
  - C) Rio de Janeiro, Brazil
  - D) Mexico City, Mexico
-



7. Sidney Crosby scored the winning hockey goal at 2:55 pm at the 2010 Winter Olympic Games in Vancouver. What time was it in his hometown of Coal Harbour, Nova Scotia?

- A) 6:55pm
- B) 5:55pm
- C) 7:55pm
- D) 7:25pm

8. Why are many records set for throwing events at Olympic Games held at higher elevations?

- A) The temperature is warmer thus providing less air resistance.
- B) The wind speed is greater thus providing less air resistance.
- C) The air pressure is lower thus providing less air resistance.
- D) The humidity is lower thus providing less air resistance.

9. What is the prevailing wind direction for Berlin, Germany (host of the 1936 Olympics)?

- A) Southerly
- B) Easterly
- C) Northerly
- D) Westerly

10. Using the map provided, what country, marked with an "X", has hosted more Olympic Games than any other European nation.



- A) Germany
- B) Great Britain
- C) Spain
- D) France

## Round 8: Human Geography

Total: (  /10)

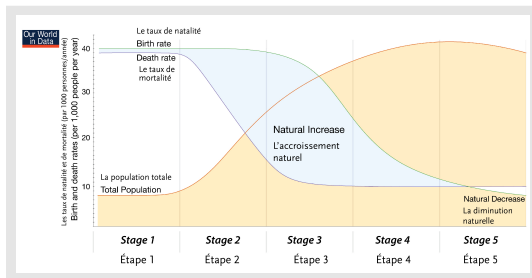
### Questions

### Answers

1. Which of the following strategies would be most effective in controlling population growth in developing nations?

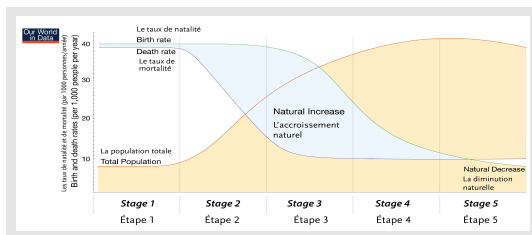
- A) Increasing the immigration rate for the country
- B) Reducing the dependence on health care facilities
- C) Providing educational opportunities for women
- D) Decreasing spending on infrastructure programs

2. Use the Demographic Transition Model provided to determine which factor would contribute to a country's transition from Stage 2 to Stage 4?



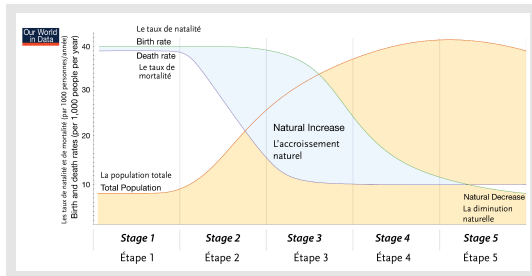
- A) Increasing stability of the government
- B) Decreasing need for immigration
- C) Increasing dependency on foreign aid programs
- D) Decreasing growth in gross national product

3. Use the Demographic Transition Model to determine which stage a country would experience low life expectancy, stable growth rate and where infections and malnutrition are common.



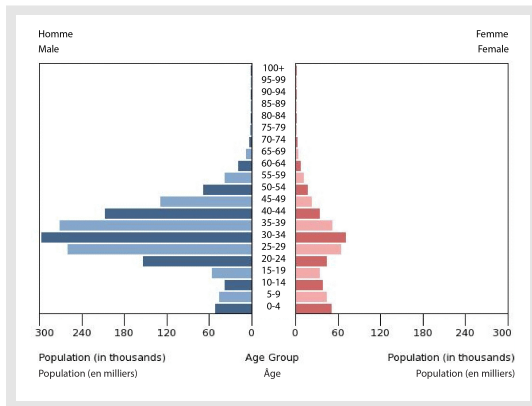
- A) Stage 3
- B) Stage 4
- C) Stage 1
- D) Stage 2

4. Use the Demographic Transition Model to determine which stage a country where their natural increase is low, number of elderly is increasing and which have a well developed population.



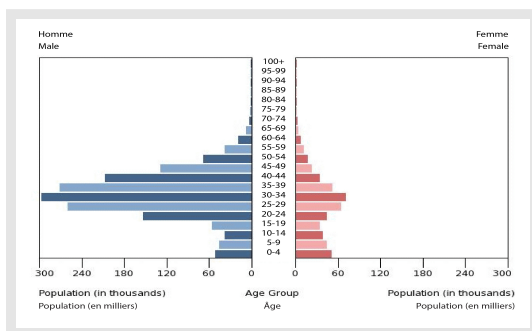
- A) Stage 2
- B) Stage 1
- C) Stage 4
- D) Stage 3

5. Which of the following statements would most likely account for the shape of this population pyramid?



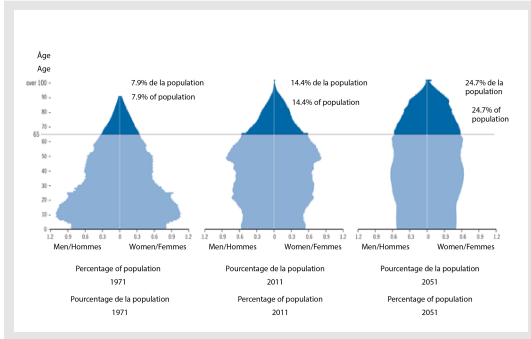
- A) There is a decrease in female education levels
- B) There was a one-child policy in place resulting in infanticide
- C) There is a dependence on temporary foreign workers
- D) There was a civil war that caused the deaths of many civilians

6. What country is represented by this population pyramid?



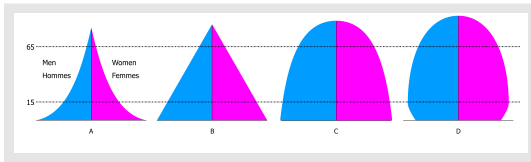
- A) Japan
- B) China
- C) Kenya
- D) Qatar

7. What trend do these population pyramids suggest about the future of Canadian society?



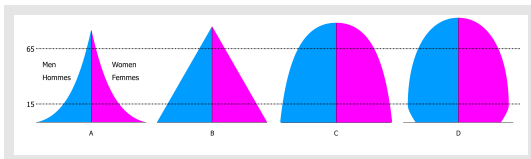
- A) Increasing demands will be placed on the health-care system
- B) Fewer immigrants will be needed to maintain a stable economy
- C) Expanding student enrollment will require more education funding
- D) Lower life expectancy rates will force governments to raise taxes

8. Which population pyramid best represents Germany in 2016?



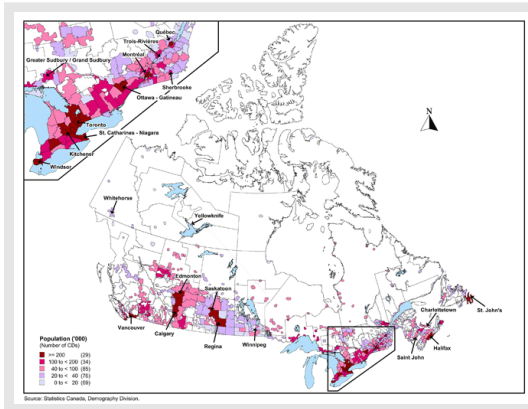
- A) A
- B) B
- C) D
- D) C

9. Which population pyramid best represents the country of Kenya?



- A) C
- B) D
- C) A
- D) B

10. Examine the map to determine which of the following statements is FALSE.



- A) Northern Canada is sparsely populated
- B) This map is based on calculating the crude density of the Canadian population
- C) The highest population density is around the Greater Toronto area
- D) Most Canadians live within 100km of the United States border

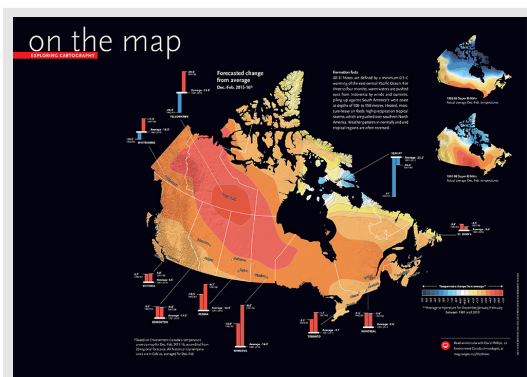
Round 9: You read it here...

Total: (  /8)

Questions

Answers

1. In 2015-2016 there were severe weather extremes worldwide. What weather pattern describes the unusual warming of surface waters in the Pacific Ocean?



- A) Typhoon
- B) El Niño
- C) La Niña
- D) Anti-cyclone

2. In which National Park was this photograph taken?

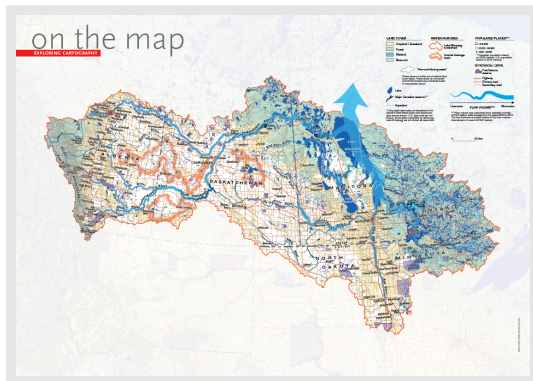


- A) Quttinirpaaq National Park
- B) Waterton Lakes National Park
- C) Pacific Rim National Park Reserve
- D) Nahanni National Park

3. Ochre Hill (named for the red dye used by Beothuks), rises 215 metres above Terra Nova National Park. In which province is this National Park?


- A) Newfoundland and Labrador
- B) Nova Scotia
- C) Prince Edward Island
- D) Ontario

4. What is this map showing?



- A) Major Highway systems
- B) Great Lakes
- C) Flooded areas
- D) Lake Winnipeg Watershed

5. In January 2016, the British Columbia government announced that 85 percent of the Great Bear Rainforest would be permanently protected from what commercial activity?



- A) Logging
- B) Mining
- C) Fishing
- D) Agriculture

6. The Khutzeymateen is Canada's first and only sanctuary of which animal.

- A) Bald Eagle
- B) Bison
- C) Grizzly Bear
- D) Orca

7. Allowing small groups controlled access to view wildlife is referred to as what?

- A) Poaching
- B) Progressive management
- C) Eco-tourism
- D) Resource exploitation

8. What traditional Eastern Canadian activity is being shown in the photograph?



- A) Collecting maple sap
- B) Bear proofing a camp site
- C) Selecting wood to make fiddles
- D) Determining the age of a tree



## Answers

### Round 1: Indigenous Peoples

1. (D) Tobacco
2. (C) Pemmican
3. (C) Iroquois
4. (C) Western red cedar
5. (A) British Columbia
6. (C) Blackfoot
7. (B) Haida
8. (B) Inuit
9. (B) Land claim marker
10. (B) Blackfoot

### Round 3: Europe Map

1. (B) 12
2. (A) 10
3. (A) 7
4. (C) 14
5. (A) 2
6. (C) 5
7. (C) 8
8. (B) 6
9. (D) 11
10. (B) 4
11. (A) 13
12. (B) 1

### Round 2: Biomes

1. (D) Desert
2. (B) Boreal Forest
3. (D) Desert and Tundra
4. (A) Tundra
5. (D) Grassland
6. (B) Savanna
7. (B) Tropical Rainforest
8. (B) Tropical Rainforest
9. (D) Rapidly flowering plants
10. (C) Rich and fertile soil

### Round 4: Oceans

1. (D) Arctic
2. (D) 71%
3. (D) Blue whale
4. (D) Indian
5. (A) Pacific
6. (A) Mariana Trench
7. (B) Continental Shelf
8. (B) TRUE
9. (A) Pacific
10. (D) Bathometer

## Round 5: Physical Geography

1. (A) Oxbow
2. (A) Stack
3. (B) Erosion
4. (A) Cinder cone
5. (D) Rift
6. (C) Shield
7. (C) Y
8. (D) The Nile
9. (D) Pyramidal peak
10. (A) Rockies

## Round 6: National Parks

1. (C) 13
2. (D) Sable Island National Park Reserve
3. (A) It is Canada's first urban national park
4. (B) FALSE
5. (C) 4
6. (B) Wapusk National Park
7. (A) 21
8. (B) TRUE
9. (C) Georgian Bay Islands National Park
10. (B) 9

## Round 7: Olympics

1. (B) Greece
2. (C) C
3. (C) Vancouver, Calgary, Montreal
4. (C) Melbourne
5. (A) Greece
6. (D) Mexico City, Mexico
7. (A) 6:55pm
8. (C) The air pressure is lower thus providing less air resistance.
9. (D) Westerly
10. (D) France

## Round 8: Human Geography

1. (C) Providing educational opportunities for women
2. (A) Increasing stability of the government
3. (C) Stage 1
4. (C) Stage 4
5. (C) There is a dependence on temporary foreign workers
6. (D) Qatar
7. (A) Increasing demands will be placed on the health-care system
8. (C) D
9. (C) A
10. (B) This map is based on calculating the crude density of the Canadian population

Round 9: You read it here...

1. (B) El Niño
2. (C) Pacific Rim National Park Reserve
3. (A) Newfoundland and Labrador
4. (D) Lake Winnipeg Watershed
5. (A) Logging
6. (C) Grizzly Bear
7. (C) Eco-tourism
8. (A) Collecting maple sap